



Name: \_\_\_\_\_

Roll No.: \_\_\_\_\_ Std 5 Div: \_\_\_\_\_

Date: \_\_\_\_\_

**1. List the sense organs along with their functions.**

---

---

---

---

---

---

**2. Draw the structure of an eye. Label the following parts and give function of each: pupil, iris, lens, and retina.**

Diagram

Pupil: \_\_\_\_\_

---

Iris: \_\_\_\_\_

---

Lens: \_\_\_\_\_

\_\_\_\_\_

Retina: \_\_\_\_\_

\_\_\_\_\_

**3. Name the following.**

(a) A membrane that vibrates in the ear: \_\_\_\_\_

(b) Sticky substance present in the nose: \_\_\_\_\_

(c) The organ that has taste buds: \_\_\_\_\_

(d) Organ for sense of touch: \_\_\_\_\_

(e) The script that helps blind people to read: \_\_\_\_\_

**4. State whether the given statement is correct or incorrect.**

(a) We should put sharp objects in the ears. \_\_\_\_\_

(b) We should avoid listening to loud music. \_\_\_\_\_

(c) Frenchman Louise Braille invented the Braille script. \_\_\_\_\_

(d) Some parts of our skin have nerve endings. \_\_\_\_\_

(e) The skin protects our body from germs. \_\_\_\_\_

**5. Give reasons.**

(a) Our eyelids open and close many times in a minute.

\_\_\_\_\_

\_\_\_\_\_

\_\_\_\_\_

\_\_\_\_\_

(b) We should not play music very loudly.

---

---

---

---

(c) Sometimes we sneeze.

---

---

---

---

**6. Answer in one sentence.**

(a) What is the Braille script?

---

---

(b) What helps you to identify a taste and how?

---

---

(c) How do we feel heat, cold, texture, pressure, and pain?

---

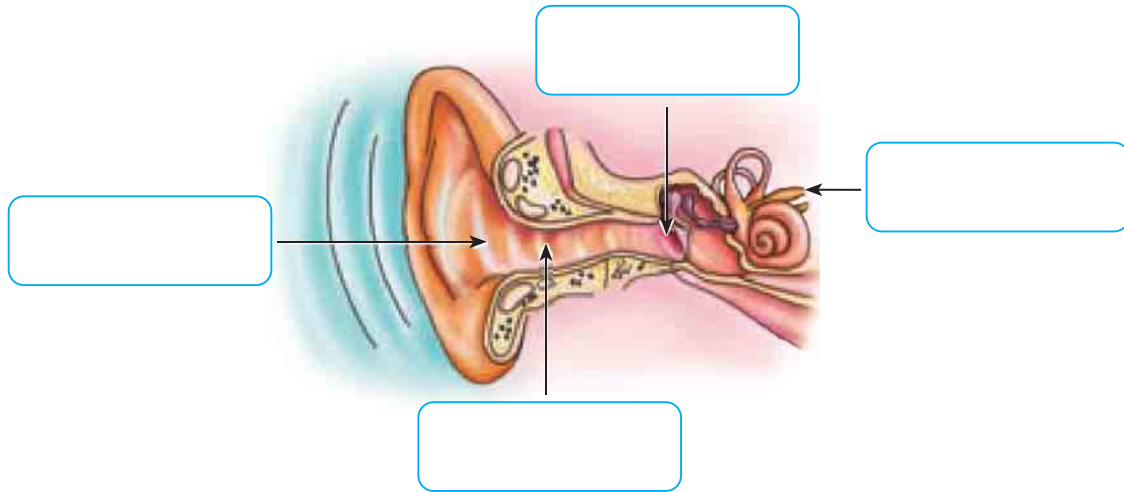
---

(d) Why are the hairs and mucus in the nose important?

---

---

7. Identify the diagram given below, label it and explain the role of each part.



---

---

---

---

---

---

---

---

---

---

8. Name the sense/s you use while doing the following activities.

- (a) While playing cricket: \_\_\_\_\_
- (b) While eating food: \_\_\_\_\_
- (c) While buying perfumes: \_\_\_\_\_
- (d) While enjoying music: \_\_\_\_\_
- (e) While feeling cold: \_\_\_\_\_

9. Write 5 points on how we should take care of our sense organs.

---

---

---

---

---

10. How do some animals make special use of the sense of smell?

---

---

---




---

---

**Self-assessment**




✓ the picture that shows how you worked today.

I liked doing this work.

yes                      so-so                      no

I found this work easy.

yes                      so-so                      no

Teacher's remark: .....

.....