



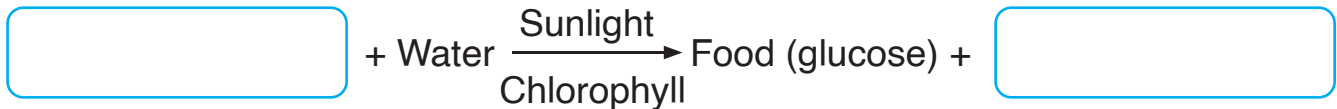
Name: _____

Roll No.: _____ Std 5 Div: _____

Date: _____

1. Explain 3 ways that show how we are dependent on plants and animals.

2. Fill in the blanks.



3. the odd one out.

- | | | | |
|---------------|-------------|------------|-------------|
| (a) Fungi | Tiger | Fox | Eagle |
| (b) Cat | Bear | Elephant | Human being |
| (c) Earthworm | Snail | Fungi | Cockroach |
| (d) Crow | Vulture | Deer | Hyena |
| (e) Bacteria | Butterflies | Honey bees | Birds |

4. Explain the following terms with examples.

(a) Producers:


(b) Consumers:

(c) Decomposers:

(d) Scavengers:

(e) Pollinators:

5. Label the diagram showing the process of photosynthesis.



6. Explain the process of photosynthesis.

7. What do you mean by primary and secondary consumers? Explain.

8. Give reasons.

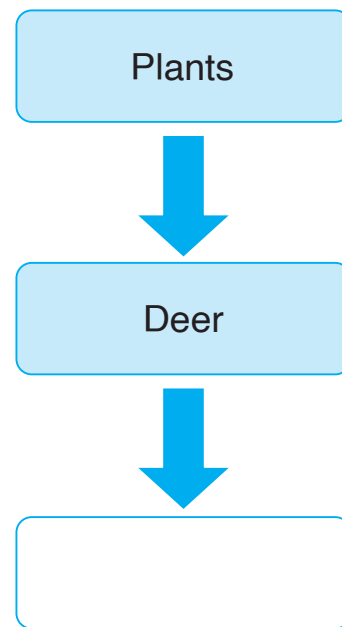
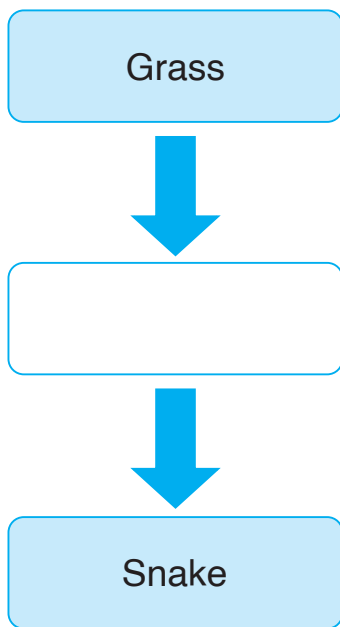
(a) Carnivores such as tigers and lions indirectly depend on plants for their food.

(b) Photosynthesis is necessary for the survival of living beings on Earth.

(c) Bacteria and fungi are called decomposers.

9. Write a note on how the earthworm helps farmers.

10. What do you mean by a food chain? Complete the following food chains.



Self-assessment

✓ the picture that shows how you worked today.

I liked doing this work.



yes



so-so



no

I found this work easy.



yes



so-so



no

Teacher's remark:

.....