



Name: \_\_\_\_\_

Roll No.: \_\_\_\_\_ Std 3 Div: \_\_\_\_\_


Date: \_\_\_\_\_

1. Write the names of a few insects you see in the surroundings. Draw one insect.

---

---

2. Label the parts of insect shown below.



**3. Match the following insects with their names.**



Mosquito




Ant



Cockroach



Dragonfly



Grasshopper

**4. Answer the following questions.**

(a) Name the 3 parts of the body of an insect.

\_\_\_\_\_

(b) Name the stages of lifecycle of a butterfly.

\_\_\_\_\_

\_\_\_\_\_

(c) Honeybee is considered as a useful insect. Why?

\_\_\_\_\_

\_\_\_\_\_

(d) Some insects such as honeybees have stinger. Give reason.

\_\_\_\_\_

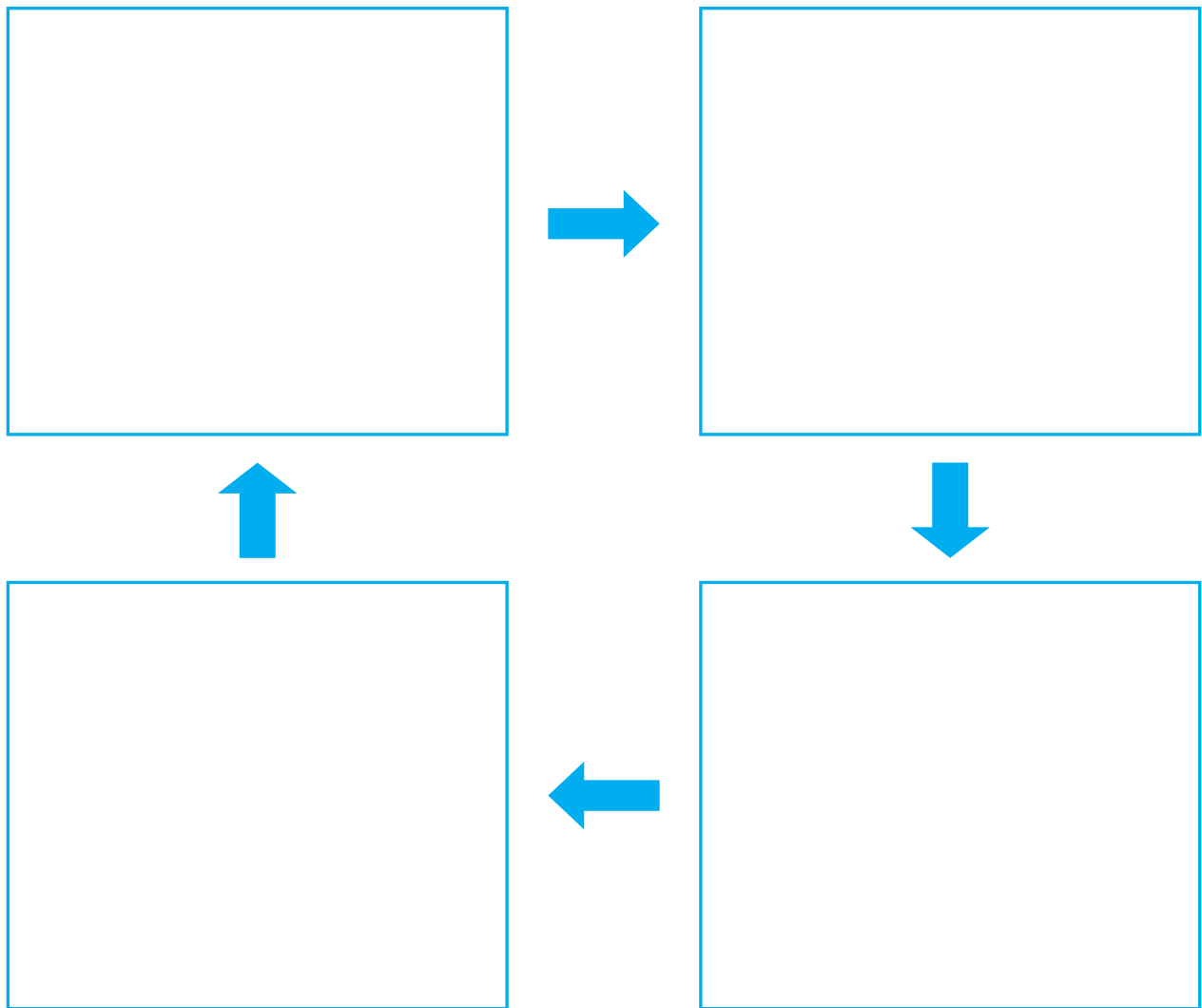
\_\_\_\_\_

**5. Fill in the blanks using correct option.**

(honeycomb, pupa, adult, stingers, Insects)

- (a) Honeybees live in a \_\_\_\_\_
- (b) Wasps and Honeybees have \_\_\_\_\_ on their back.
- (c) \_\_\_\_\_ are the largest group of animals.
- (d) An insect goes through several stages before it becomes an \_\_\_\_\_.
- (e) The larva grows into \_\_\_\_\_ within the sealed cell.

**6. Draw and label the life cycle of a honeybee.**



## Self-assessment

✓ the picture that shows how you worked today.

I liked doing this work.



yes



so-so



no

I found this work easy.



yes



so-so



no

Teacher's remark: .....

.....