



Name: _____

Roll No.: _____ Std 2 Div: _____

Date: _____

1. Write 3 differences you see in: Day Sky and Night Sky.



No.	Day Sky	Night Sky
(a)		
(b)		
(c)		

2. Draw the different shapes of the Moon.

Half Moon:


Crescent Moon:

Full Moon:

3. Write the colours you see in the rainbow.



4. Circle the things that you see in the sky.



5. Name the following.

- (a) I am your natural source of light. _____
- (b) I change my shape every day. _____
- (c) We are the tiny dots that sparkle at night. _____
- (d) You see me when an object blocks sunlight. _____

6. ✓ the correct statement in each pair.

- 1. (a) The Sun rises in the east and sets in the west.
- (b) We can see stars in the morning.

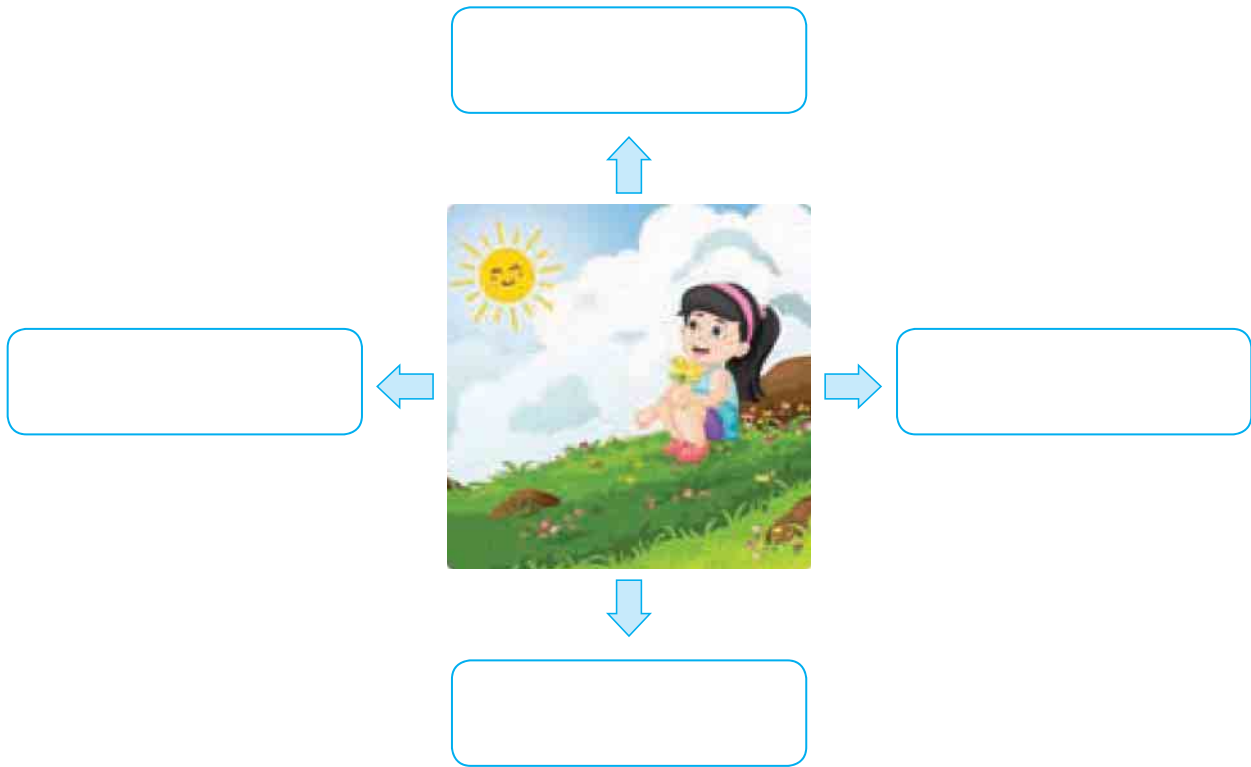
2. (a) The Moon has its own light.
- (b) The Moon gets its light from the Sun.
3. (a) There are thousands of stars in the sky.
- (b) There is only one star visible in the day sky.
4. (a) The Moon keeps going around Earth.
- (b) Earth keeps going around the Moon.
5. (a) Shadows are formed without light.
- (b) Shadows are formed when objects block light.

7. Fill in the blanks with the correct options.

(survive, Sun, sunset, shadow, Moon)

- (a) The _____ is our only natural source of light.
- (b) The _____ gets light from the Sun.
- (c) The _____ of an object is the dark area where sunlight cannot reach.
- (d) After the _____, we can see the Moon and thousands of stars in the sky.
- (e) The heat and light from the Sun help all living things to _____.




8. Write the directions. Imagine that the girl is facing the Sun.



Self-assessment




✓ the picture that shows how you worked today.

I liked doing this work.

yes so-so no

I found this work easy.

yes so-so no

Teacher's remark:

.....