



Name: _____

Roll No.: _____ Std 2 Div: _____

Date: _____

1. Draw and colour any means of travel you like and label its parts.

2. ✓ the vehicles that need fuel.

(a)




(b)



(c)



(d)



(e)



(f)




3. Draw the signboards given below.


(a) No entry:




(b) No Parking:



(c) U turn:



(d) Speed limit 50 km/h:



4. What does each light of traffic signal say?

Red: _____

Yellow: _____

Green: _____




5. X the odd one out.

(a)



(b)





6. Answer the following questions.

(a) Write the 3 modes of transport.

(b) Name 4 vehicles that need fuel.

(c) Write the names of 3 special vehicles.

7. Fill in the blanks with the correct options.

(vehicles, camel, air, yellow, mules, metro, horses)

(a) The _____ is known as the ship of the desert.

(b) We must slow down when we see a _____ signal.

(c) One means of public transport is _____.

(d) Animals such as _____ and _____ are used for travel and transport in mountains.

(e) The mode of transport used by the helicopter is _____.

(f) We need _____ to travel.

8. Read the name of a vehicle and think: What is its mode of transport? Then write the vehicle name in the correct column.

(Vehicles: helicopter, car, bus, ship, aeroplane, rocket, submarine, train, boat)

Air	Land	Water

9. Write 5 purposes for which we need to travel.

10. Draw any means of public transport and give reason why you consider it as a public transport.

Self-assessment

✓ the picture that shows how you worked today.

I liked doing this work.



yes



so-so



no

I found this work easy.



yes



so-so



no

Teacher's remark:

.....