



Name: _____

Roll No.: _____ Std 2 Div: _____

Date: _____

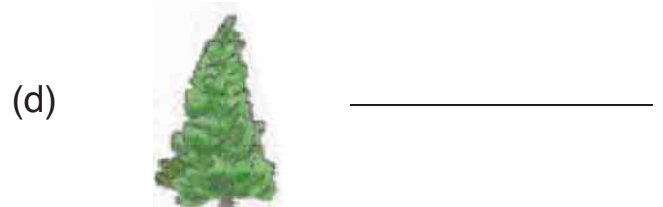



1. Name 3 things we get from plants. Draw and colour them.

--	--	--


2. Write 1 use of each thing you have drawn above.


3. Where do I grow? Choose from the given options.


(coast, pond, mountain, desert)





4. These are some parts of plants. Write one use of each part.

(a)  It is used to make _____.


(b)  It is used to make _____.

(c)  It is used to make _____.

(d) It _____ is used to make .

(e) The leaves of this plant are used to make _____ .


5. Name these parts of plants.

(a)  _____

(b)  _____

(c)  _____

(d)  _____

(e)  _____

(f)  _____

6. Write True or False.

(a) Plants are a source of food for us. _____

(b) Plants don't use carbon dioxide. _____

(c) Plants need sunlight to grow. _____

(d) We get sugar from plants. _____

(e) Plants help in bringing rains. _____

(f) A small seed germinates into plant. _____

7. Fill in the blanks with the correct options.

(wood, cereals, oxygen, sunlight, fruit)

- (a) We get _____ and pulses from seeds.
- (b) Banana is a _____.
- (c) Plants give us _____ to breathe.
- (d) Plants use _____ to make food.
- (e) Furniture is made of _____.

8. Write each thing in the correct column.

(sweet potato, potato, ginger, spinach, carrot, lettuce, cauliflower, broccoli)

Root	Stem	Leaf	Flower

9. What are the conditions required for germination of a seed?

10. Write each thing in the correct column.

(whole moong, wheat, bajra, black-eyed beans, rice, kidney beans, chick peas, corn)

Cereals	Pulses

11. ✓ the things we get from plants.

(a)



(b)



(c)



(d)



(e)



Self-assessment

✓ the picture that shows how you worked today.

I liked doing this work.



yes



so-so



no

I found this work easy.



yes



so-so



no

Teacher's remark:

.....