








Quick Assessment No. 5.2 - Numbers [10 to 19]



Name: _____




Roll No.: _____ Std: 1 Division: _____ Date: _____

Q.1. Write the numbers that come before, after, and between the given numbers.

a. 11   14

b.   17 

c.   18

d. 16   

Q.2. Compare the given numbers. Circle the greater number.

a. 17 12

b. 14 18

c. 19 16

d. 13 17

Q.3. Circle the greatest number and underline the smallest number.

Then arrange the numbers in ascending and descending orders.

ascending order

descending order

a. [18 11 10] →

b. [17 12 15] →

Q.4. Read the story and write the correct answer.

Ratan, Rani, and Raj went for shopping. Ratan bought colour pencils for 18 rupees. Rani purchased a book for 15 rupees. Raj had 10 rupees. He got a pencil and an eraser for 10 rupees.

- a. Who spent the most amount? _____
- b. Who spent the least amount? _____
- c. Arrange the names of children in ascending order showing the amount spent:

_____, _____, _____

Teacher's remark: _____