



# Quick Assessment No. 5.1 - Numbers [10 to 19]

Name: \_\_\_\_\_

Roll No.: \_\_\_\_\_ Std: 1 Division: \_\_\_\_\_ Date: \_\_\_\_\_

**Q.1. Count objects in each group. Colour the  red that shows a group of 10 objects.**





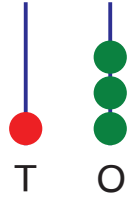
**Q.2. Draw.**

a.	1 ten mangoes	
b.	1 ten balls	

**Q.3. Count and circle ten dots. Write the number of encircled dots as tens and the remaining dots as ones. Then write the number and number name.**

	Dots	Tens	Ones	Number	Number name
a.					
b.					
c.					
d.					
e.					

**Q.4. Write the numbers as sum of tens and ones.**

a.		<p>_____ ten + _____ ones = _____</p>
b.		<p>_____ ten + _____ ones = _____</p>
c.	 <p style="text-align: center;">T      O</p>	<p>_____ ten + _____ ones = _____</p>

**Q.5. Circle the digit in the tens place. Underline the digit in the ones place.**

a. 1 1

b. 1 9

c. 1 0

d. 1 6

**Teacher's remark:** \_\_\_\_\_