


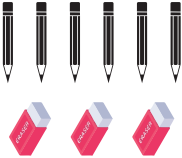


Quick Assessment No. 4.3 - Subtraction [0 to 9]

Name: _____

Roll No.: _____ Std: 1 Division: _____ Date: _____


Q.1. Write one addition and two subtraction sentences for this group of objects.

	As addition	As subtraction
		
		

Q.2. Read each story. Find the difference.

- a. There were 6 oranges in a plate. Ram ate 2 oranges. How many oranges are left in the plate?

$$\square - \square = \square$$



Ans. oranges are left in the plate.

- b. Gauri had 9 tomatoes. She used 4 tomatoes for making salad. How many tomatoes are left with her?

$$\square - \square = \square$$



Ans. tomatoes are left.

Q.3. Write the correct answer.

- a. There are 7 chillies. 2 are red chillies. How many are not red chillies?

- b. There are 6 fruits. 1 is a pear. How many are not pears?

- c. There are 9 roses. 2 roses are yellow-coloured. How many roses are not yellow-coloured?

- d. In a set of 8 pieces, there are 4 plates and 2 cups. Remaining are bowls.

How many bowls are there?

Teacher's remark: _____