




## Quick Assessment No. 4.1 - Subtraction [0 to 9]

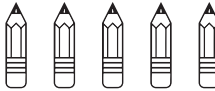
Name: \_\_\_\_\_


Roll No.: \_\_\_\_\_ Std: 1 Division: \_\_\_\_\_ Date: \_\_\_\_\_


**Q.1. Cross one from each group to show one less than. Write the number in the box to show how many are left.**

a. 8 cats, 1 ran away =  cats left 


b. 4 mangoes, 1 mango eaten =  mangoes left 

c. 5 pencils, 1 pencil lost =  pencils left 


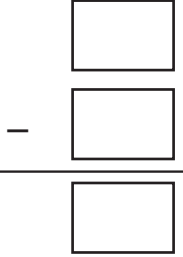
d. 3 cupcakes, 1 given to Rohan =  cupcakes left 


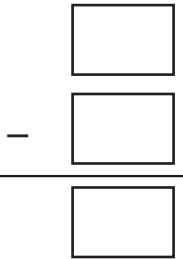
e. 7 birds on a branch, 1 flew away =  birds left 

**Q.2. Write the subtraction sentence. Find the difference.**

a.   -  =

b.   -  =

c.  

d.  

e.  

**Q.3. Find the difference.**

a. 7 bananas – none eaten =  bananas left

b. 4 apples – none shared =  apples left

c. 6 balloons – none burst =  balloons left

**Teacher's remark:** \_\_\_\_\_