

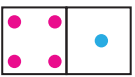


Quick Assessment No. 3.3 - Addition [0 to 9]

Name: _____

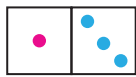
Roll No.: _____ Std: 1 Division: _____ Date: _____

Q.1 Write these addition sentences in different orders.

a. 

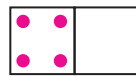
+ = 5

+ = 5

b. 

+ = 4

+ = 4

c. 

+ = 4

+ = 4

Q.2. Write the addition facts of 7 using different numbers. Select any two numbers from the brackets that add up to 7.

[0, 1, 2, 3, 4, 5, 6, 7]

a. _____ + _____ = 7

b. _____ + _____ = 7

c. _____ + _____ = 7


d. _____ + _____ = _____

Q.3. Solve these story problems.

- a. Pinki's mother made a salad with 5 cucumbers and 4 tomatoes. How many vegetables did she use in all?

+ =


cucumbers tomatoes vegetables in all



- b. Sunny fed tomatoes to 2 elephants and 3 monkeys. How many animals did he feed in all?

$$\boxed{} + \boxed{} = \boxed{}$$

elephants monkeys animals in all



- c. Rinku grated 6 carrots and Raima grated 0 carrots. How many carrots did they grate altogether?

$$\boxed{} + \boxed{} = \boxed{}$$

carrots carrots carrots in all



- d. Ali has 7 toy cars. His sister gave him 2 more. How many cars does he have now?

$$\boxed{} + \boxed{} = \boxed{}$$


cars cars cars in all



- e. There are 2 apples and 5 bananas in a basket. How many fruits are there in all in the basket?

$$\boxed{} + \boxed{} = \boxed{}$$

apples bananas fruits in all



Teacher's remark: _____