





Quick Assessment No. 3.2 - Addition [0 to 9]




Name: _____

Roll No.: _____ Std: 1 Division: _____ Date: _____

Q.1. Count the fingers. Write the addition sentence.

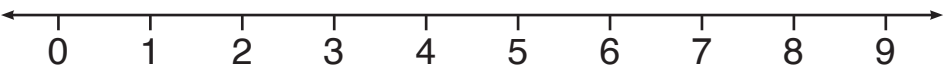
a.  


_____ + _____ = _____

b.   

_____ + _____ + _____ = _____

Q.2. Use the number line. Find the sum.

a. $4 + 2 = \square$ 

b. $3 + 5 = \square$ 

Q. 3. Draw the dots in the boxes. Add them to find the sum.

a. $\square + \square = \underline{\quad}$ b. $\square + \square = \underline{\quad}$

2 + 3 = _____ 4 + 4 = _____

Q.4. Find the sum.

a. $2 + 7 = \underline{\quad}$ b. $6 + 3 = \underline{\quad}$ c. $5 + 2 = \underline{\quad}$

Teacher's remark: _____