



Quick Assessment No. 2.1 - Numbers [0 to 9]

Name: _____

Roll No.: _____ Std: 1 Division: _____ Date: _____

Q.1. Complete the given number strips.

- a. Write numbers in order from 0 to 9.




- b. Write numbers in order from 9 to 0.




Q.2. Count the fish in each group. Write the number and its number name.


a.



b.



c.




d.



Q.3. Draw cherries on each bunch.

a. 3 cherries




b. 4 cherries



c. 0 cherries



Q.4. Count and write the number of legs each animal has.



Q.5. Write the numbers that come before or after the given numbers.

a. _____, _____, 2

b. _____, _____, _____, 9

c. 0, _____, _____, _____

d. 5, _____, _____, _____

Q.6. Write the numbers that come between the two given numbers.

a. 3 _____, _____, 6

b. 5 _____, _____, _____, 9

Q.7. Fill in the blanks.

a. I come before 6, but after 4. I am number _____.

b. I come after 7, but before 9. I am number _____.

c. We are between 0 and 5. We are numbers _____.

Teacher's remark: _____