



## Quick Assessment No. 1.1 - Spatial Understanding


Name: \_\_\_\_\_

Roll No.: \_\_\_\_\_ Std: 1 Division: \_\_\_\_\_ Date: \_\_\_\_\_

### Q.1. Observe the picture and fill in the blanks with top / bottom.

a. The boy is at the \_\_\_\_\_ of the stairs.

b. The girl is near the \_\_\_\_\_ of the stairs.



### Q.2. Observe the family tree of Tarun and Tanya. Do as directed.

a. Circle the members at the top of the family tree.


b. Tick the members at the bottom of the family tree.




### Q.3. Observe the pictures and do as directed.

a. Circle the things that are on the table.

b. Cross the things that are under the table.






- c. Draw a ball under the bench.
- d. Draw a bat on the bench.



**Q.4. Observe the pictures and do as directed.**

- a. Circle the child outside the house.
- b. Tick the child inside the house.



- c. Draw 1 banana  inside the basket.
- d. Draw 2 oranges   outside the basket.



**Teacher's remark:** \_\_\_\_\_